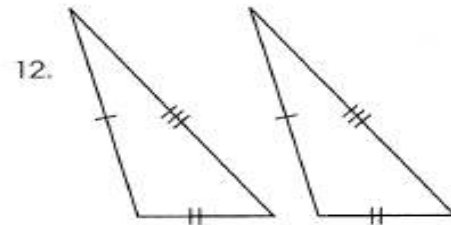
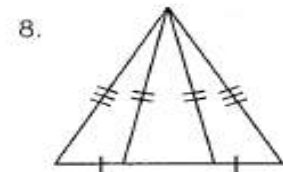
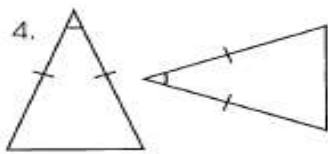
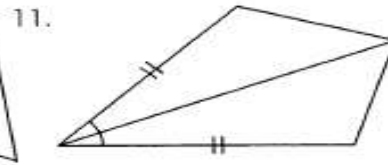
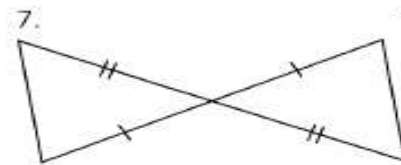
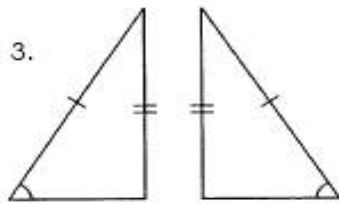
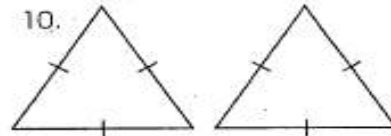
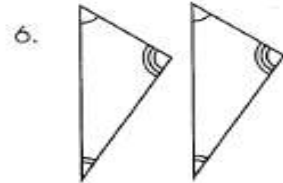
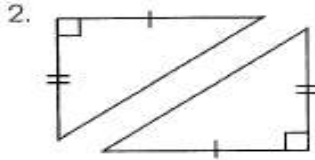
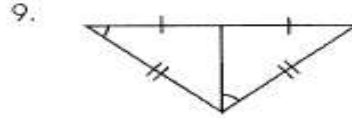
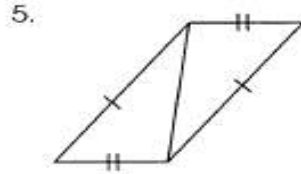
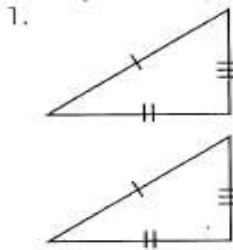


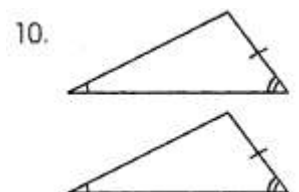
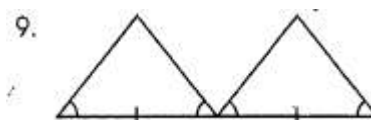
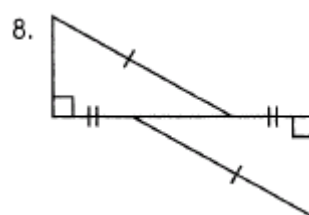
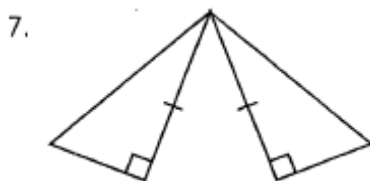
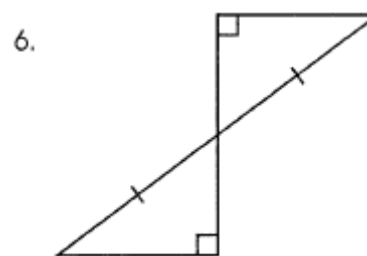
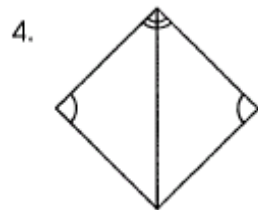
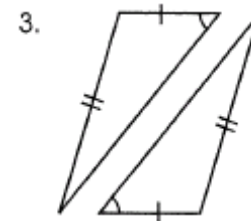
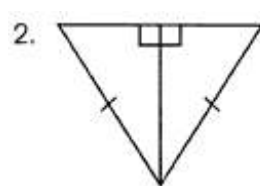
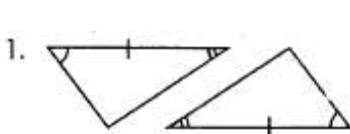
# Congruent Triangles Worksheet #2

Name \_\_\_\_\_ Period \_\_\_\_\_

I. State whether these triangles are congruent by SSS, SAS, or none.



II. State whether these triangles are congruent by ASA, AAS, HL, or none.



III. State whether each pair of triangles is congruent by SSS, SAS, ASA, AAS, HL, or none.

- 1.
- 2.
- 3.
- 4.
- 5.
- 6.
- 7.
- 8.
- 9.
- 10.
- 11.
- 12.
- 13.
- 14.
- 15.
- 16.
- 17.
- 18.
- 19.
- 20.
- 21.
- 22.
- 23.
- 24.
- 25.
- 26.
- 27.
- 28.
- 29.
- 30.