

Name _____ Per _____

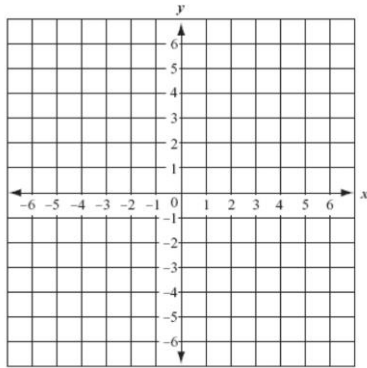
Review: Slopes and Distances

$$\text{Slope: } m = \frac{\text{rise}}{\text{run}}$$

$$\text{Distance: } \sqrt{(x_2 - x_1)^2 + (y_2 - y_1)^2}$$

A(-2, 3) and B(4, 1)

- Plot points AB and Connect:
- Find the slope of AB:
- Find the distance of AB:



Name _____ Per _____

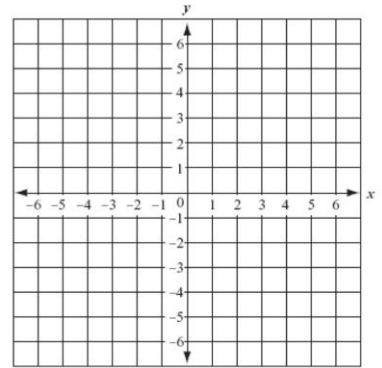
Review: Slopes and Distances

$$\text{Slope: } m = \frac{\text{rise}}{\text{run}}$$

$$\text{Distance: } \sqrt{(x_2 - x_1)^2 + (y_2 - y_1)^2}$$

A(-2, 3) and B(4, 1)

- Plot points AB and Connect:
- Find the slope of AB:
- Find the distance of AB:



Name _____ Per _____

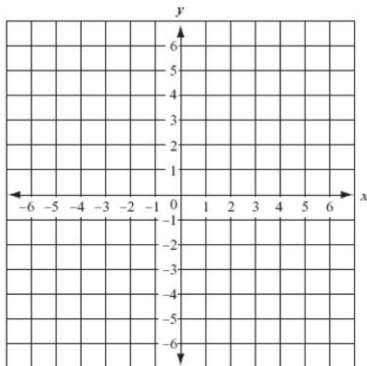
Review: Slopes and Distances

$$\text{Slope: } m = \frac{\text{rise}}{\text{run}}$$

$$\text{Distance: } \sqrt{(x_2 - x_1)^2 + (y_2 - y_1)^2}$$

A(-2, 3) and B(4, 1)

- Plot points AB and Connect:
- Find the slope of AB:
- Find the distance of AB:



Name _____ Per _____

Review: Slopes and Distances

$$\text{Slope: } m = \frac{\text{rise}}{\text{run}}$$

$$\text{Distance: } \sqrt{(x_2 - x_1)^2 + (y_2 - y_1)^2}$$

A(-2, 3) and B(4, 1)

- Plot points AB and Connect:
- Find the slope of AB:
- Find the distance of AB:

