

Name \_\_\_\_\_ Date \_\_\_\_\_ Per \_\_\_\_\_

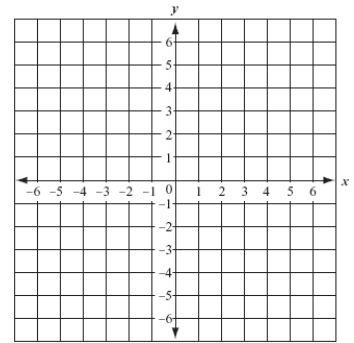
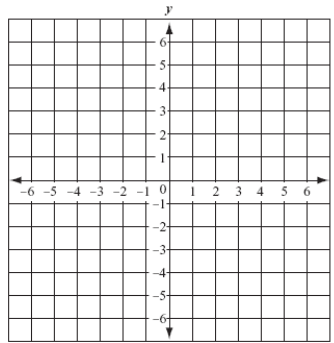
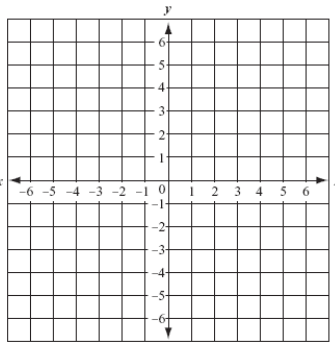
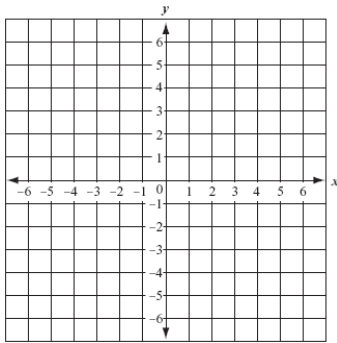
Graph the lines using any method: Due Tuesday

1.)  $-2x + 6y = 12$

2.)  $y = \frac{3}{4}x - 5$

3.)  $5x = 10 - 2x3.$

4.)  $3x + y = 5$

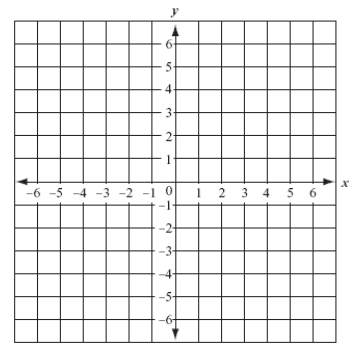
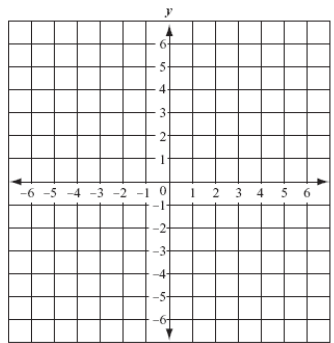
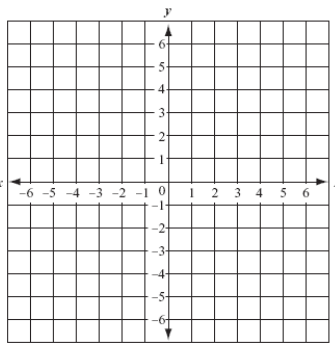
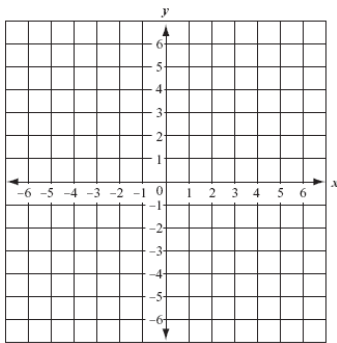


5.)  $2y = 4x - 6$

6.)  $x - y = 6$

7.)  $y = -\frac{3}{2}x + 1$

8.)  $3y - 4x = 12$



Name \_\_\_\_\_ Date \_\_\_\_\_ Per \_\_\_\_\_

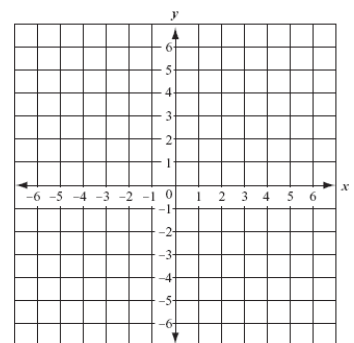
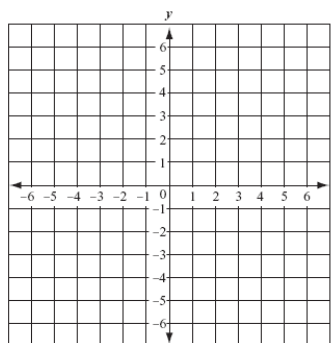
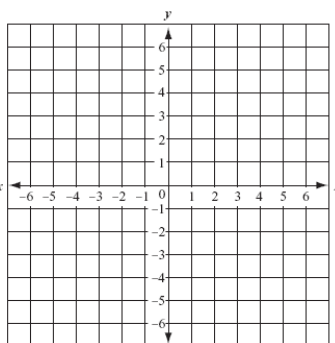
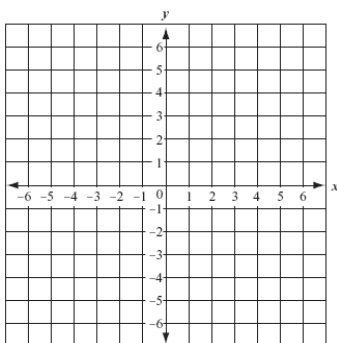
Graph the lines using any method: Due Tuesday

1.)  $-2x + 6y = 12$

2.)  $y = \frac{3}{4}x - 5$

3.)  $5x = 10 - 2x3.$

4.)  $3x + y = 5$



5.)  $2y = 4x - 6$

6.)  $x - y = 6$

7.)  $y = -\frac{3}{2}x + 1$

8.)  $3y - 4x = 12$

